

ШЕСТНАДЕСЕТ СОФИЙСКИ МАТЕМАТИЧЕСКИ ТУРНИР

1. КЛАС

8 НОЕМВРИ 2014 Г.

Име:, училище

1. задача

2. задача

$4 + 0 + 1$	<input type="text"/>	5	$1 + 3 + 0$	<input type="text"/>	4
$2 + 1$	<input type="text"/>	4	$5 - 2$	<input type="text"/>	2

3. задача

<input checked="" type="checkbox"/>	<input type="checkbox"/>	<input type="checkbox"/>	<input checked="" type="checkbox"/>	<input type="checkbox"/>	<input type="checkbox"/>	<input checked="" type="checkbox"/>	<input type="checkbox"/>	<input type="checkbox"/>	<input checked="" type="checkbox"/>
-------------------------------------	--------------------------	--------------------------	-------------------------------------	--------------------------	--------------------------	-------------------------------------	--------------------------	--------------------------	-------------------------------------

<input type="checkbox"/>	<input type="checkbox"/>	<input type="checkbox"/>	<input checked="" type="checkbox"/>	<input type="checkbox"/>	<input type="checkbox"/>	<input type="checkbox"/>	<input type="checkbox"/>	<input checked="" type="checkbox"/>	<input type="checkbox"/>
--------------------------	--------------------------	--------------------------	-------------------------------------	--------------------------	--------------------------	--------------------------	--------------------------	-------------------------------------	--------------------------

<input checked="" type="checkbox"/>	<input type="checkbox"/>	<input type="checkbox"/>	<input type="checkbox"/>	<input type="checkbox"/>	<input type="checkbox"/>	<input type="checkbox"/>	<input type="checkbox"/>	<input type="checkbox"/>	<input checked="" type="checkbox"/>
-------------------------------------	--------------------------	--------------------------	--------------------------	--------------------------	--------------------------	--------------------------	--------------------------	--------------------------	-------------------------------------

4. задача

□
 △
 ○ **6**

5. задача

2 □ 2 □ 4
 3 □ 1 □ 4
 2 □ 3 □ 1 3 □ 5 □ 2

6. задача

$\heartsuit = 5$ $\heartsuit = 3$
 $5 - 3 = 2$

$\heartsuit = \square$ $\heartsuit = \square$
 $\square - \square = \square$

$\heartsuit = \square$ $\heartsuit = \square$
 $\square - \square = \square$

$\heartsuit = \square$ $\heartsuit = \square$
 $\square - \square = \square$

7. задача

$+2$
 $1 \rightarrow 3$ $3 \rightarrow 0$

-3



4





2




8. задача

1 2 3 4

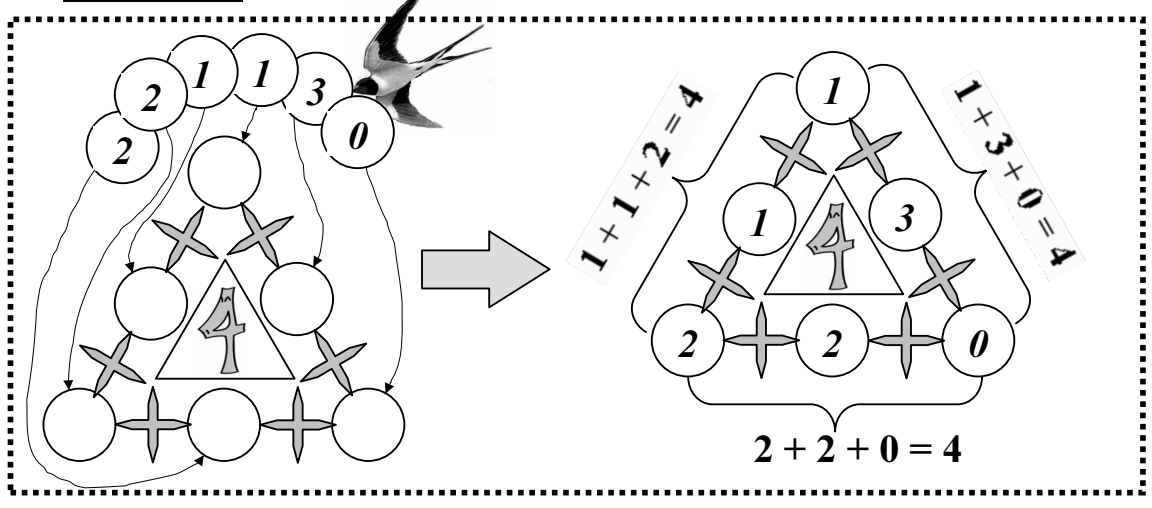


\square

9. задача $4 - 1 =$   =

 +  +  = 5  =

$2 -$  $<$   =

10. задача

ОЦЕНКА НА РЕЗУЛТАТИТЕ

1 зад.	2 зад.	3 зад.	4 зад.	5 зад.	6 зад.	7 зад.	8 зад.	9 зад.	10 зад.	Общ брой точки:
Проверил: (име, фамилия)										Подпис: